

1. Joe got 34,867 points playing a video game, and Carlos got 29,978 points. How many more points did Joe get than Carlos? (4-4)

- A 14,889
- B 4,999
- C 4,989
- D 4,889

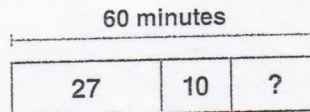
2. The table shows tickets sold to the school play.

Tickets Sold	
Thursday	320
Friday	282
Saturday	375

Which is the best estimate of the total tickets sold? (4-2)

- A 1,100
 - B 1,000
 - C 900
 - D 800
3. David went to a sporting goods store with \$400 and bought a set of golf clubs for \$239 including the tax. How much money did David have left after his purchase? (4-5)
- A \$160
 - B \$161
 - C \$260
 - D \$261

4. Manuel has 60 minutes to get to karate class. If it takes him 27 minutes to ride his bike to class and 10 minutes to change into his karate uniform, how much time does he have before he must leave his house? (4-6)



- A 20 minutes
 - B 21 minutes
 - C 23 minutes
 - D 97 minutes
5. To advertise for the school fun fair, 325 flyers were printed on Wednesday, 468 flyers were printed on Thursday, and 815 flyers were printed on Friday. How many flyers were printed in all? (4-3)
- A 1,620
 - B 1,608
 - C 1,508
 - D 1,600
6. Garrett drove 239 miles on Saturday and 149 miles on Sunday. To find $239 + 149$, Garrett made a multiple of ten, as shown below. What is the missing number? (4-1)
- $$239 + 149 = 240 + \quad = 388$$
- A 129
 - B 130
 - C 147
 - D 148

Constructed Response

7. A musical group made 8,000 copies of a CD. So far, they have sold 6,280 copies. How many copies are left? (4-5)

8. In April, 5,326 books were checked out of the library. In May, 3,294 books were checked out. How many books were checked out in all? (4-3)

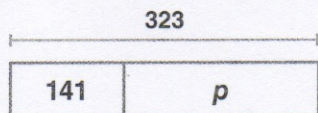
9. What number makes the number sentence true? (4-1)

$$28 + 79 = \quad + 28$$

10. Betty had 719 pennies in her piggy bank. If she gave her sister 239 pennies, how many pennies did Betty have left? (4-4)

11. The last total solar eclipse seen in Dallas, Texas was in 1623. The next one will not be seen until 2024. Write a number sentence that uses rounding to the tens place to estimate the number of years between the eclipses. (4-2)

12. Daria's book has 323 pages. She has read 141 pages. Use the diagram below to find the number of pages, p , she has left to read. (4-6)

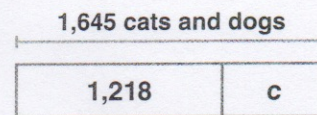


13. Find $5,000 - 2,898$. (4-5)

14. Joe and Sara recorded the number of birds they saw in the park over the summer. How many more birds did they see in 2010 than 2011? (4-4)

Birds	
Summer 2010	458
Summer 2011	397

15. In 2010, an animal shelter found adoption homes for 1,645 cats and dogs. If 1,218 of the adopted pets were dogs, how many cats, c , were adopted in 2010? (4-6)



16. The average home attendance at a team's baseball games was 17,435. In a larger city, the average number was 46,491. Round to the nearest ten thousand. About how many more people attended games in the larger city? (4-2)

17. Toby and Quinn collected canned food for a food drive. Toby collected 38 cans and Quinn collected 44. How many cans did Toby and Quinn collect in all? Explain how you can use mental math to find the answer. (4-1)